



KAMPALA PARENTS' SCHOOL 2004

PRIMARY SIX REVISION WORK INTEGRATED SCIENCE – SET 16

Name: _____ Stream: _____

1. Name one example of a flightless bird.

2. Apart from pertussis, state one other immunisable disease prevented by using DPT vaccine.

3. Name any one vitamin deficiency disease that affects humans.

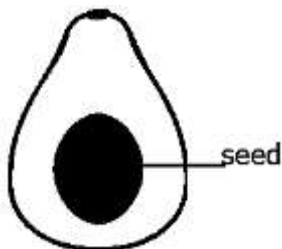
4. In the space below draw a compound pinnate leaf.



5. Write one condition needed for photosynthesis to take place.

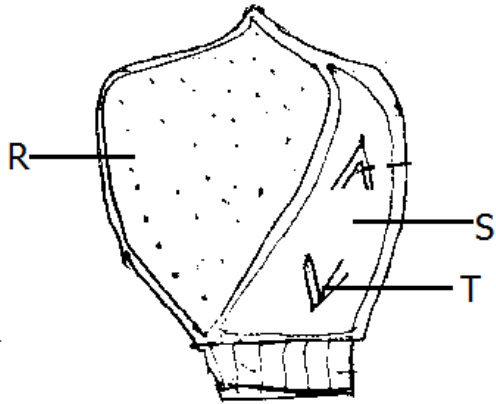
6. In which one way can people increase the volume of blood in their bodies?

7. To which group of succulent fruits does the fruit below belong?



8. How is the propagation of bananas similar to that of pineapples?

9. **The diagram below shows a cross section of a maize grain.**



a) Name parts marked R and T

i) R _____

ii) T _____

b) What is the function of the part marked S?

c) Why is a maize grain regarded as a fruit not a seed?

10. a) What is seed germination? _____

b) Give the role of each of the following during germination of seeds.

i) moisture _____

ii) warmth _____

c) State one factor that may fail a seed to germinate when all necessary conditions are present.

11. a) Define the term seed dispersal.

b) Give one way in which seed dispersal is important to plants.

c) Write any two methods in which seeds are dispersed.

-END-



KAMPALA PARENTS' SCHOOL 2004

PRIMARY SIX REVISION WORK

ENGLISH – SET 16

Name: _____ **Stream:** _____

For each of the questions 1 -15, rewrite the sentences as instructed in the brackets

1. This is the girl. She won the essay writing competition. (Rewrite as one sentence using:...who.....) _____

2. Jorah is quite stubborn. He sometimes dodges lessons. (Rewrite as one sentence using:.....so.....that.....) _____

3. The guest enjoyed the food. The host also enjoyed the food. (Rewrite as one sentence using:.....and so.....) _____

4. We arrived at Entebbe airport at 8:00am. (Rewrite the sentence using:.....reached.....) _____

5. Opio rides a bicycle every day. (Rewrite the sentence beginning: A bicycle)
6. Kamu is five feet tall. Kato is also five feet tall. (Rewrite as one sentence using:.....as.....as.....) _____

7. A cow eats grass. A goat eats grass. (Rewrite as one sentence beginning: Both.....)
8. There are some oranges in the basket. (Rewrite the sentence using:.....any.....)
9. I borrowed a pen from Nakimuli. (Rewrite beginning: Nakimuli.....)
10. Okumu's daughter is very young. She cannot marry. (Rewrite the sentence using:.....enough.....) _____

11. It has rained heavily. I can't go to the market. (Rewrite as one sentence:.....because.....)
12. I saw the woman. Her handbag was stolen. (Rewrite as one sentence using:.....whose.....)
13. Joan is very tired. She cannot walk by herself. (Rewrite as one sentence using:....too....to.....)
14. I was born twelve years ago. (Rewrite beginning: It is twelve.....)

15. You become wiser as you grow old. (Rewrite ending:.....you become.)

SECTION B

Use the words given below to complete the passage correctly.

Music show! Music show! Music show!
Presenters: Bobi Wine, Juliana
Venue: Kiwatule Recreational Centre
Date: 2nd August, 2019
Time: 7:00p.m – till dawn
Fee: Adults: 10,000/=
Students: 5,000/=
Couple: 15,000/=

Come one! Come All!

**Management,
Silk Events
11-06-2019**

Questions

16. What is the advertisement about?

17. Who wrote the above information?

18. At what time will the show start?

19. How much will a husband and his wife pay?

20. Why do you think students pay less money?

21. Where will the show take place?

22. Give another word or group of words to mean.

dawn _____

23. Who has been invited to present at the show?

24. How many musicians will present on that day?

End



KAMPALA PARENTS' SCHOOL 2004

PRIMARY SIX REVISION WORK

SOCIAL STUDIES – SET 16

Name: _____ Stream: _____

1. What is the compass direction between South East and South?

2. How many countries border Uganda?

3. In which Hemisphere is Uganda according to the prime meridian?

4. How does the increase in altitude affect temperature?

5. What is a confluence? _____

6. Name each of the following lakes in Uganda.

i) the deepest _____

ii) most salty _____

iii) most shallow _____

7. Mention any two pastoral tribes in East Africa.

i) _____

ii) _____

8. Why is the prime meridian marked 0°?

9. Name the main cash crop growing in the following places.

i) Tilda _____

ii) Kalangala _____

iii) Kilombero valley _____

iv) Kericho in Kenya _____

10. How do mangrove forests support ship building?

11. Name any one economic activity which is carried out in Savanna woodland.

12. Name one by-product got from planted forests.

13. Mention any two gifts of the Holy Spirit.

i) _____

ii) _____

14. State any two pillars of Islam.

i) _____

ii) _____

-END-



KAMPALA PARENTS' SCHOOL 2004

PRIMARY SIX REVISION WORK MATHEMATICS – SET 16

Name: _____ Stream: _____

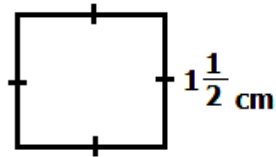
1. **Simplify:** $2m - 6n + 3m - n$

2. **Subtract:** $311_{\text{five}} - 222_{\text{five}}$

3. Draw a Venn diagram to show that all girls are women.

4. Given that set $P = \{\text{Prime numbers less than } 10\}$. How many subsets are in set P ?

5. The figure below is a square. Find the area.

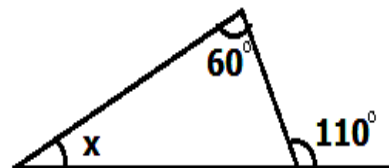


6. What are the next two numbers in the sequence?

81, 27, 9, _____, _____

7. Find the mean of 4, 0, 9 and 7.

8. Find the value of x in the diagram.



9. Change $\frac{3}{4}$ to a decimal fraction.

10. What is $2^3 + 4^0$?

11. Musa went to the market and bought the following items.

1½kg of meat at shs.10,000 per kg

2 loaves of bread at shs.7000

500g of tea leaves at shs.1000 per kg

a) How much did he spend altogether?

(3mks)

b) How much did he go with if he was given change of shs.550?

(2mks)

12. a) Find the GCF of 24 and 56. (2mks)

b) Find the least number of mangoes that can be shared by 4 boys and 5 girls that leaves a remainder of 3 mangoes. (3mks)