

THE SIPRO PRE-PLE SET IV 2022

SOCIAL STUDIES WITH RELIGIOUS EDUCATION

Time Allowed: 2 Hours 15 Minutes

Random No.

Personal No.

Index No.

Candidate's Name: _____

Candidate's signature: _____

School Random No. _____

District ID: _____

READ THE FOLLOWING INSTRUCTIONS CAREFULLY:

1. This paper has two sections: A and B.
2. Section A has 40 questions (40 Marks).
3. Section B has 15 questions (60 Marks).
4. Attempt all questions in both sections. All answers to both sections A and B, must be written in the spaces provided.
5. All answers must be written in blue or black ball point pens or ink. Only diagrams and graph work must be done in pencil.
6. Unnecessary alteration of work will lead to loss of marks.
7. Any *handwriting* that cannot be easily read may lead to loss of marks.
8. Do not fill anything in the boxes indicated.

"FOR EXAMINER'S USE ONLY"

For Examiner's Use Only:

PAGES	MARKS	INITIALS
Page 1		
Page 2		
Page 3		
Page 4		
Page 5		
Page 6		
Page 7		
Page 8		
Page 9		
Total		

Please turn over



THE SIPRO EDUCATIONAL SERVICES LIMITED - KAMPALA

PUBLISHERS OF THE SIPRO TEACHERS' GUIDE, LEARNER'S WORKBOOKS & PUPILS' COMPANIONS

SECTION A: 40 MARKS

Questions 1 to 40 carry one mark each

1. State one way children keep security at home.

2. Give any one reason why it is not good to misuse swatops.

3. Mention the African country where the headquarters of African Union are located.

4. Write any one reason why people plant trees.

5. Why is Africa believed to be the cradleland of mankind?

6. Write any one good thing which multi-party system of government promotes in a country.

7. Give any one way in which River Nile promotes development in areas around it.

8. Name the body in Uganda responsible for organising national population census.

9. State any one way poverty can be reduced in your community.

10. How does latitude affect the climate of an area?

11. Give any one way in which labour is important in the establishment of an industry.

12. State any one reason why people should learn practical skills at school.

13. Fuel prices in Uganda have gone high, give any one danger of this to the economy of a country.

14. In which way are social activities important in the community?

15. Mention any one reason why a big population is important in a country.

16. Write one benefit of schools to the government.



17. Name the tax in Uganda that is charged on goods entering a country
-
18. How did the people of Tanzania show their need for independence?
-
19. Name the official who is in charge of controlling funds in a ministry.
-
20. State any one way of conserving cultural information for the future.
-
21. What process led to the formation of Lake Katwe?
-
22. Give any one use of a rain gauge at a weather station.
-
23. Name the king in Uganda who was restored to his throne by Captain F.D Lugard.
-
24. Give any one responsibility of the judicial organ of government in Uganda.
-
25. State any one reason why people save money today.
-
26. Mention the stanza of the Uganda National Anthem that promotes the love of God
-
27. Write any one reason why Karamoja sub-region is not suitable for growing perennial crops.
-
28. Name the organisation of the UN, that promotes children's rights in the world.
-
29. Mention any one reason why some people in rural areas do not get good social services.
-
30. What is the use of a calendar in a home?
-
31. Give any one way through which teachers promote discipline in the class.
-



32. How does a bill become a law in Uganda?

33. Name the ethnic group of people who occupied the areas around Lake Victoria in East Africa.

34. Give any one reason why most people in Uganda use road transport to move from one place to another.

35. Name the method of crop farming shown in the diagram below.



In each of the questions 36 to 40, answer EITHER the Christian OR Islamic questions but not both on the same number. No marks will be awarded to a candidate who attempts both alternatives in a particular number.

36. Either: How did the wise men from the East find the place where Jesus was born?

Or : How was Jerusalem important to early Muslims?

37. Either: Name the document which the married couple in church should sign

Or : Name the document which a married couple should have.

38. Either: Give any one reason why Jesus ate with the sinners.

Or : Give any one reason why Prophet Muhammad (PBUH) helped the needy.

39. Either: Why is Abraham important in Christianity?

Or : Why is Prophet Ibrahim important in Islam?

40. Either: Give any one advantage of praying before going to bed.

Or : Give any one advantage of Taraweeh prayers in Islam.



SECTION B: 60 MARKS

Questions 41 to 55 carry four marks each

41. a) Name the ancient kingdom in Uganda that collapsed due to the Luo invasion

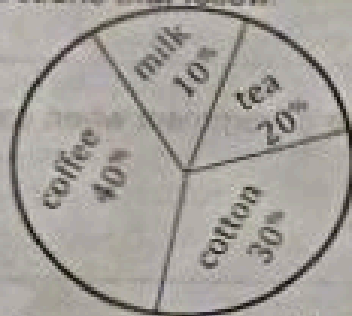
b) Mention any one way in which the Bachwezi developed the economy of Uganda.

c) State any two ways in which kingdoms bring about development in Uganda.

i) _____

ii) _____

42. The pie-chart below shows some of the exports of Uganda. Use it to answer the questions that follow



a) Name the major export crop of Uganda.

b) Mention the type of farming shown above.

c) Give any one way in which milk exports of Uganda can be increased.

d) Why have cotton exports reduced in Uganda?

43. a) Name the type of budget where income is more than the expenditure.

b) Give any two ways the above budget causes development in a country.

i) _____

ii) _____

c) State any one value of preparing a budget before you spend money.



44. a) Name the type of trade that replaced slave trade in East Africa.

b) Write one benefit of the type of trade in (a) above.

c) State any two ways in which slave trade affected African societies negatively.

i) _____

ii) _____

45. a) Mention the group of people in Uganda who are trained to carry out population census.

b) State any two values of carrying out population census in a country.

i) _____

ii) _____

c) Mention any one challenge faced by the government when carrying out population census.

46. a) Name any one area that was transferred to Kenya during the fixing of Uganda's boundaries.

b) Why did the British use physical features to fix the boundaries of Uganda?

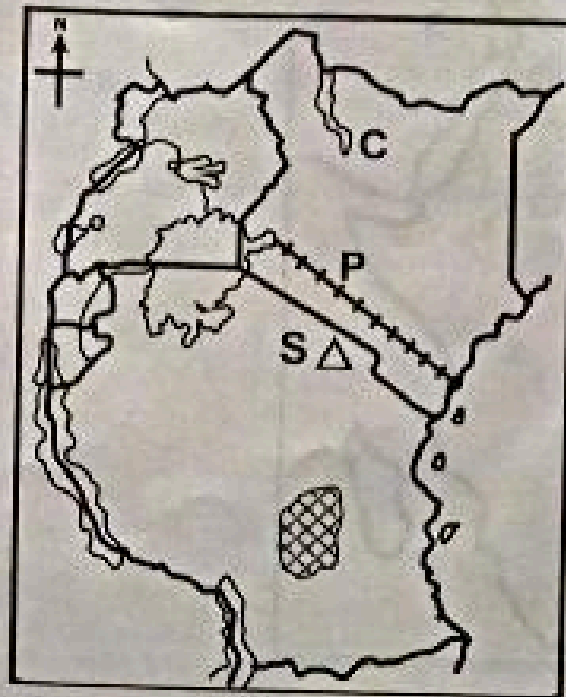
c) Give any two negative effects of fixing the boundaries of Uganda.


i) _____

ii) _____



47. Study the sketch map of East Africa below and use it to answer the questions that follow.



a) Name the national park found in the shaded area  on the map.

b) How was the formation of the feature marked S different from that of the feature marked C?

c) Give any one reason why Africans refused to work on the building of the railway line marked P.

d) Use letter V to show Ethiopia on the map above.

48. a) Name the group of people in South Africa who made the Great Trek.

b) Give any one cause of the Great Trek in South Africa.

c) State any two ways in which the Great Trek affected the people of South Africa.

i) _____

ii) _____



49. Study the sketch map of Africa below and use it to answer the questions that follow.



a) Name the irrigation scheme in the shaded area  on the map above.

b) Give any one reason why the water passage marked S was built.

c) How is the area marked X economically important to Nigeria?

d) Give any one problem faced by farmers in the area marked P on the map.

50. a) Give any two reasons why people leave villages to go and stay in towns.

i) _____

ii) _____

b) State any two ways in which the government can encourage people to live in villages.

i) _____

ii) _____

questions but not both. No marks will be awarded to a candidate who attempts both alternatives in a particular number.

51. Either: a) Name any two symbols of a Christian family

i) _____

ii) _____

b) Give any two ways in which the Christian symbols named above are important in Christianity.

i) _____

ii) _____

Or : a) Name any two symbols of a Muslim family

i) _____

ii) _____

b) Give any two values of the symbols named in (a) above in a Muslim family.

i) _____

ii) _____

52. Either: a) Who was the first human being to be created by God before He rested?

b) In which way was the creation of the human being named in (a) above different from that of other creatures?

c) How did the human being named in (a) above sin against God?

d) State any one reason why sinning is bad.

Or : a) Who was the first human being to be created by Allah before He rested?

b) In which way was the creation of the human being named in (a) above different from that of other creatures?

c) How did the human being named in (a) above sin against Allah?

d) State any one reason why sinning is bad.

53. Either: a) What message did each of the prophets below preach?

i) Isaiah _____

ii) John the Baptist _____



b) Mention any two importance of prophets in Christianity.

i) _____

ii) _____

Or : a) Why are the prophets below remembered in Islam?

i) Musa _____

ii) Dauda _____

b) Give two importance of Prophets in Islam.

i) _____

ii) _____

54. Either: a) What important message did Mary receive from Angel Gabriel?

b) Why did Mary accept the message from Angel Gabriel?

c) Give any two ways through which Jesus Christ used His authority on earth.

i) _____

ii) _____

Or : a) What important message did Prophet Muhammad (PBUH) receive from Angel Jibril?

c) Why did Prophet Muhammad (PBUH) fear when the Angel came to Him?

b) Give any two reasons why Muslims should obey the commands of Allah.

i) _____

ii) _____

55. Both: a) Mention any two causes of misunderstandings among people in our communities.

i) _____

ii) _____

b) Give any two ways through which misunderstandings are dangerous to people.

i) _____

ii) _____

