


END OF TERM III 2017  
APTITUDE  
TOP CLASS

1. My name is \_\_\_\_\_
2. I am \_\_\_\_\_ years old.
3. My school is called \_\_\_\_\_.
4. The room where we sleep at home is called a \_\_\_\_\_  
(kitchen sitting room bedroom)

4.   
**Name the people shown.**

- A = \_\_\_\_\_  
B = \_\_\_\_\_  
C = \_\_\_\_\_  
D = \_\_\_\_\_

6. **Draw the animals found in a home.**

dog	hen	rabbit

7. **What did God give you?**


God gave me eyes to \_\_\_\_\_.

He gave me \_\_\_\_\_ to walk.

And also ears to \_\_\_\_\_.

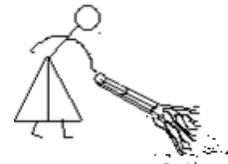
8. **Draw and name.**

Two foods you love to eat



9. **Match correctly.**

sweeping



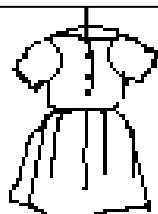
cooking



digging



10. **Name the clothes we wear.**





\_\_\_\_\_

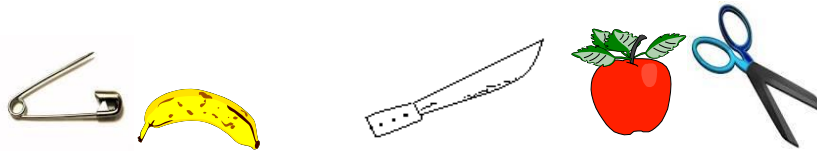
(dress

shirt


shorts

socks )

11. Cross objects that can cause accidents.



12. Complete the patterns.




13. Match the types of weather to their elements.


- a) Rainy                      clouds
- b) Windy                     sunshine
- c) Cloudy                    rainfall
- d) Sunny                     wind

14. Read and draw.


a) ears




b) mouth




c) nose




d) eyes




e) Legs



f) hands



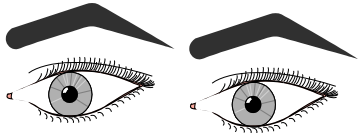
g) head



15. **Match the parts of the body with their uses.**



Seeing



Hearing



Smelling

**16. Read and answer questions below.**

a) What is your name? (2 marks)

---

b) What is the name of your school? (2 marks)

---

**\*\*\*END\*\*\***

**GERSHIBON CHRISTIAN SCHOOLS  
END OF TERM III 2017**

**READING  
TOP CLASS**

My name is \_\_\_\_\_

I am in \_\_\_\_\_ class.

1. **Listen and write**

(a) \_\_\_\_\_ (b) \_\_\_\_\_ (c) \_\_\_\_\_

2. **Read and draw**

<b>moon</b>	<b>stool</b>	<b>book</b>	<b>school</b>

3. **Fill in the missing letters.**

b\_\_nana

carr\_\_t

g\_\_at

w\_\_ter

4. **Write the words correctly.**



werflo

\_\_\_\_\_

tools

\_\_\_\_\_



itek


\_\_\_\_\_



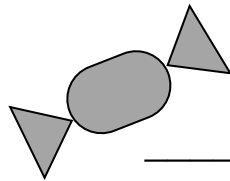
ressd

\_\_\_\_\_

5. **Give the first sound.**



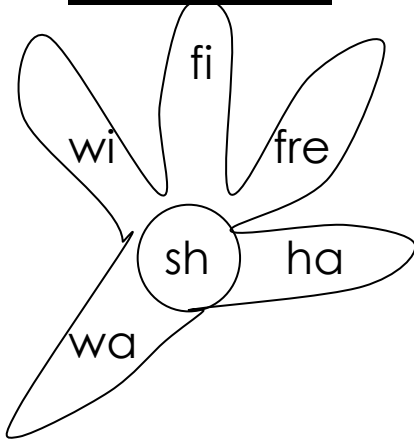
\_\_\_\_\_



\_\_\_\_\_

\_\_\_\_\_

6. **Form words.**



e.g. fresh,

\_\_\_\_\_

\_\_\_\_\_

\_\_\_\_\_

7. **Tick the different word.**

book      boom      book      book

house      house      house      horse

Peter      Pat      Pat      Pat

cassava      cassava      carrot      cassava

8. **Find a small word from the big one.**

e.g woman = man

cupboard = \_\_\_\_\_

handbag = \_\_\_\_\_

pencil = \_\_\_\_\_

homework = \_\_\_\_\_


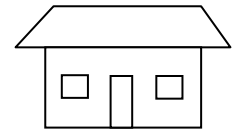
9. **Match the sentences to pictures.**

Paulo has a small ball.

Here is the banana.

The man is in the boat.

A house has two windows. e



10. **What can you find?**

b	o	o	k
i			
g	i	r	l
	n		

---

---

---

---

11. **Write one word for the syllable.**

ru - ruler

po - \_\_\_\_\_

be - \_\_\_\_\_

fi - \_\_\_\_\_

ta - \_\_\_\_\_

12. **Give the number word.**





Jane has 3 \_\_\_\_\_ ducks.

A dog has  \_\_\_\_\_ legs

There are  \_\_\_\_\_ apples in the basket.

Tom put  \_\_\_\_\_ eggs on a plate.

13. My name is Kakara. I am six years old.

My home is at Kabuye. I have a nice school called Sir Apollo Primary School.

I love my teachers and my friends.

1. How old is Kakara?

\_\_\_\_\_

2. Where is her home?

\_\_\_\_\_

3. Kakara's school is called \_\_\_\_\_

\_\_\_\_\_

4. Draw Kakara with her friends at school. *(4 marks)*

ENGLISH  
TOP CLASS

My name is \_\_\_\_\_

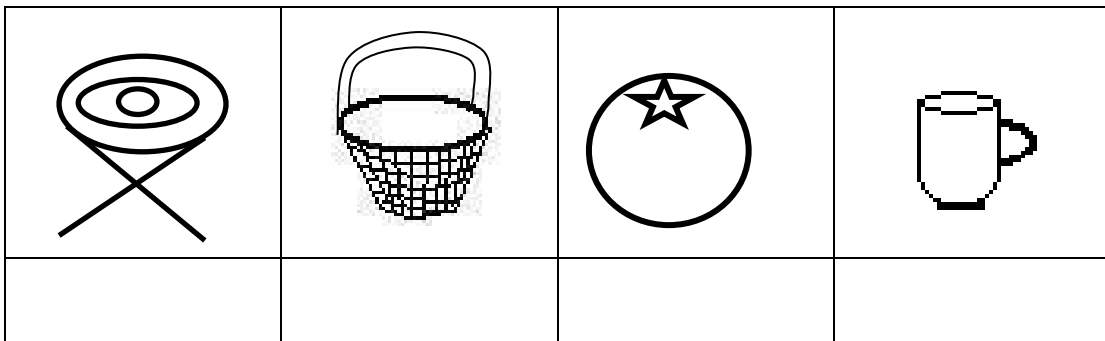
I am in \_\_\_\_\_ class.

1. **Listen and write**

(a) \_\_\_\_\_ (b) \_\_\_\_\_ (c) \_\_\_\_\_

(d) \_\_\_\_\_

2. **Name these pictures.**



3. Use **has** or **have**

Peter \_\_\_\_\_ a bicycle.

I \_\_\_\_\_ a nice dress.

The fat cow \_\_\_\_\_ a fat calf.

Jane and Joy \_\_\_\_\_ a red ball.

4. **Read and draw.**

The apple is in a basket. \_\_\_\_\_

Here is the rabbit. \_\_\_\_\_

The man is sitting under the tree. \_\_\_\_\_

They are playing with a ball. \_\_\_\_\_

5. **Complete these sentences.**

My teacher has a nice \_\_\_\_\_.

A cow has \_\_\_\_\_ legs.

The aeroplane is flying over the \_\_\_\_\_.

Here comes the fat \_\_\_\_\_.

6. Use **True** or **Untrue**

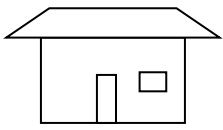
I have two hands. \_\_\_\_\_

Peter is a girl. \_\_\_\_\_

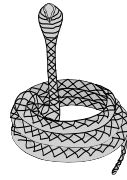
Dogs keep our homes. \_\_\_\_\_

We are eating stones and sticks. \_\_\_\_\_


7. **Underline the correct word for the picture.**



horse  
house  
hut



shake  
sanke  
snake


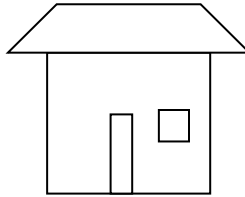



orange  
pineapple  
carrot



cup  
glass  
tea

8. **Use** under in over on



\_\_\_\_\_

9. **Complete the table**

drink	drinking
play	
walk	
sweep	
make	

10. **Match correctly**

cow

eggs

tree

water

lake

mangoes

hen

milk

10. **Name these types of clothes.**



\_\_\_\_\_



\_\_\_\_\_



\_\_\_\_\_



\_\_\_\_\_

\_\_\_\_\_

**tie**

**skirt**

**dress**

**shorts**

**shirt**

11. **Read and answer correctly.**

## Fruits we eat at home

We have four types of fruits we eat at home.

We have mangoes, pineapples, oranges and watermelon.

Father and mother love to eat watermelon and oranges.

Sister and brother love to eat mangoes and pineapples.


1. We have \_\_\_\_\_ types of fruits at home.
2. What do father and mother love to eat?

---


3. Who loves to eat mangoes and pineapples?

---

4. **Name these fruits.**



---



---

***Good luck***

**GERSHIBON CHRISTIAN SCHOOLS**  
**END OF TERM III JOINT EXAMINATION 2017**  
**TOP CLASS**  
**NUMBERS**

My name is \_\_\_\_\_

I am in \_\_\_\_\_ class.

1. **Listen and write.**





(a) \_\_\_\_\_

(b) \_\_\_\_\_

(c) \_\_\_\_\_

(d) \_\_\_\_\_

2. **Match the triangles to the correct number.**

	3
	8
	5
	0

3. **Add (+)**

$4 + 4 = \square$

5

6

+ 2

+ 1

$3 + 0 + 2 = \square$

\_\_\_\_\_

\_\_\_\_\_

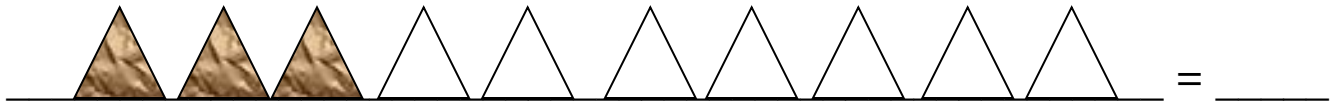
4. What number comes before?

\_\_\_\_, 4

\_\_\_\_, 7

\_\_\_\_, 2

5. How many triangles are shaded?



6. Read and draw shapes.

circle	square	rectangle	triangle

7. Take away

$$3 - 3 = \square$$

$$\begin{array}{r} 4 \\ - 2 \\ \hline \end{array}$$

$$\begin{array}{r} 6 \\ - 5 \\ \hline \end{array}$$

$$7 - 1 = \square$$



8. Draw the beads.

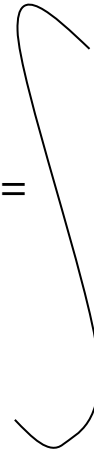
six =



zero =



eight =




9. Arrange these numbers in order.

3, 0, 1, 2, = \_\_\_\_\_


1, 4, 3, 2 = \_\_\_\_\_

8, 6, 5, 7 = \_\_\_\_\_

10. Tell the time.



It is \_\_\_\_\_ o'clock.



It is \_\_\_\_\_ o'clock.

11. Use **tall, taller, tallest**



**Jane**



**Joy**



**Jesica**

Jesica is the \_\_\_\_\_ girl.

Jane is \_\_\_\_\_ and \_\_\_\_\_ is taller.

12. **Add these numbers.**

Six plus two equals \_\_\_\_\_.

Eight plus one equals \_\_\_\_\_.

13. **Read and answer**

**There are seven days in a week.**

Sunday, Monday, Tuesday, Wednesday, Thursday,  
Friday and Saturday.

**Seven days make a week.**

a. How many days make a week?

\_\_\_\_\_

b. **Fill in the missing days.**

Sunday, Monday, \_\_\_\_\_, Wednesday, Thursday,  
\_\_\_\_\_ and Saturday.

14. **Work out**

Pat has six apples. Peter has two apples.

How many apples do they have altogether?

\_\_\_\_\_ + \_\_\_\_\_ = \_\_\_\_\_ apples. (3 marks)

My teacher had five sweets. A boy took away three sweets. How many sweets remained with my teacher?

\_\_\_\_\_ - \_\_\_\_\_ = \_\_\_\_\_ sweets.

15. Draw a big box.

Put in two balls and three pencils. (4 marks)