



KAMPALA PARENTS' SCHOOL 2004


PRIMARY SEVEN REVISION WORK INTEGRATED SCIENCE – SET 17

Name: _____ Stream: _____

1. Mention one place where white blood cells are manufactured in the body.

2. Name the element of PHC that controls population growth in an area.

3. How is the seed shown below able to be dispersed by animals?

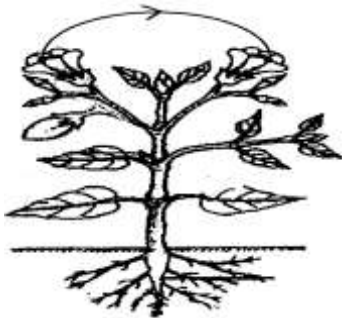


4. State one way of controlling the spread of bilharziasis in our communities.

5. Which vector spreads bubonic plague?

6. Why is it unwise to remove wax from the ear using a needle?

7. Identify the type of pollination shown below.

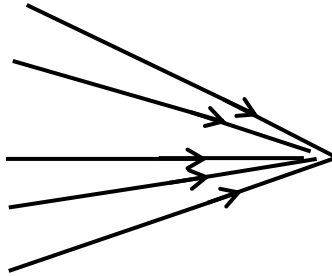


8. Identify the property of magnetism that enables a compass to work.

9. Mention one service offered to pregnant women during antenatal visits.

10. Why are breast feeding babies weaned at 4 – 6 months?

11. Identify the type of beam shown below.



12. Give one example of a sex deviation in our communities.

13. How can old jerrycans be reused at home?

14. Why is a maize plant unable to carry out self pollination?

15. Give one reason why farmers dehorn cattle.

16. How useful is a wire mesh on a rabbit hutch?

17. a) To which group of simple machines are the following classified;

i) winch _____

ii) ramp _____

iii) wheel barrow _____

b) How does a wedge simplify work?

c) State one importance of a pulley at school.

18. a) Why should the following be carried out at home?

i) draining stagnant water _____

ii) clearing bushes _____

iii) smoking pit latrines _____

b) Why should a latrine be constructed 30 metres away from a water source?



KAMPALA PARENTS' SCHOOL 2004

PRIMARY SEVEN REVISION WORK

ENGLISH – SET 17

Name: _____ Stream: _____

In nos. 1-5, fill the blank space with the right word

1. Besides teaching, Mr.Sengere is a trader dealing _____second hand clothes.
2. He was called_____because he lost his wife recently.
3. All that_____is not gold.
4. _____our house is new, it leaks whenever it rains.
5. "Don't _____the answer in my ear," the teacher yelled at me, speak loudly for everybody to hear.

Nos. 6-15, uses the word in brackets correctly to fill the blank space.

6. A terrible _____ensued among the prison inmates. (fighting)
7. We need to make repairs to _____ the bridge. (strong)
8. The government will not open schools until the covid-19 situation returns to _____
(normal)
9. I dislike that _____mother of yours. (quarrel)
10. All these problems have_____as a result of the widespread poverty in our area.
(arise)
11. The doctor's_____proved that Lynda was suffering from diabetes. (diagnose)
12. A mvule tree sheds_____leaves during dry season. (it)
13. When _____you born? (to be)
14. The butcher _____his panga and cut a piece of meat for me. (sharp)
15. David Livingstone worked hard towards the _____ of slavery in the world. (abolish)

The dialogue below was between a student and a journalist. The words of the journalist are not given. Complete the dialogue with what you think were the journalist's correct responses.

Student: Good morning sir.

Journalist: _____

Student: What's your profession?

Journalist: _____

Student: You're a journalist? What do journalists do?

Journalist: _____

Student: They write and report news? What do they report for?

Journalist: _____

Student: They report for electronic and print media? So for your case, what do you report for?

Journalist: _____

Student: You report for print media? What does a print media mean?

Journalist: _____

Student: Print media means newspapers, magazines and journals? So which newspapers do you report for?

Journalist: _____

Student: You report for the New Vision. What do you report in the New Vision?

Journalist: _____

Student: You report about sports. How do you gather the sports news?

Journalist: _____

Student: By visiting different sports teams and clubs! Thank you so much for educating me, sir.

Journalist: _____

-END-



KAMPALA PARENTS' SCHOOL 2004

PRIMARY SEVEN REVISION WORK

SOCIAL STUDIES – SET 17

Name: _____ Stream: _____

1. Which physical feature is useful in the generation of Hydro-Electric power?

2. How does wind help in winnowing?

3. Why was it necessary for African countries to unite after independence?

4. How do common wealth nations benefit from common wealth games?

5. Why is Northern Nigeria dry?

6. Give one danger of transporting petroleum products by road.

7. Why is mining not well developed in Uganda?

8. Give any one forest conservation practice.

9. Why should a country have peaceful change of leaders?

10. State any one danger of poaching.

11. Why are African countries not growing at the same rate?

12. Mention any two problems the government has tried to solve through U.P.E.


i) _____

ii) _____

13. a) Which part of East Africa was regarded as Zanj Empire?

b) Why was the above area regarded as Zanj Empire?

c) Why was the area named in (a) above not a true empire?



14. Name any one economic activity where the tool above is used.

RELIGIOUS EDUCATION

15. a) Which Biblical prophet fed on locusts and wild honey?

b) How did the above prophet meet his death?

16. Which Islamic prophet was sold to Misri by his brothers?

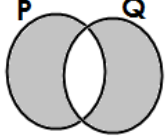
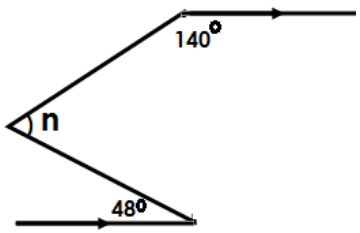
***** *END* *****



KAMPALA PARENTS' SCHOOL 2004

PRIMARY SEVEN REVISION WORK MATHEMATICS – SET 17

Name: _____ Stream: _____

1. Write in words; 30028	2. Describe the shaded part. 
3. Five pens costs 6000/=. How many pens can one buy with sh.7200?	4. The bearing of Y from N is 359° . Find the bearing of N from Y.
5. Simplify: $(y-2) - (3-2y)$	6. Convert $\frac{3}{4}$ kg to grammes.
7. In the diagram below calculate the value of n. 	8. The perimeter of the rectangle below is 34cm. Find the length of the diagonal. 