



KAMPALA PARENTS' SCHOOL 2004

PRIMARY FIVE REVISION WORK

ENGLISH – SET 16

Name: _____ Stream: _____

Use the correct form of the word given in brackets.

1. We _____ him at the post office last week. (meet)
2. If Kian _____ to town, he would buy some stamps. (go)
3. I _____ to you next week. (write)
4. The boys shared the cake _____ amongst themselves. (equal)
5. Amagolo is a friend of _____. (me)

Rearrange these words alphabetically.

6. parcel, packet, package, post.

7. telephone, card, letter, mobile phone

Write the plural form of these words.

8. Mobile phone _____

9. Mouse _____

10. Ox _____

Rewrite this paragraph with the correct punctuation

ronald bought a mobile phone last week before using it he charged the battery then placed the sim card the first person he called was his longtime friend hamza next he called his parents who live in gulu informing them of his new mobile telephone

-END-



KAMPALA PARENTS' SCHOOL 2004

PRIMARY FIVE REVISION WORK

SOCIAL STUDIES – SET 16

Name: _____ Stream: _____

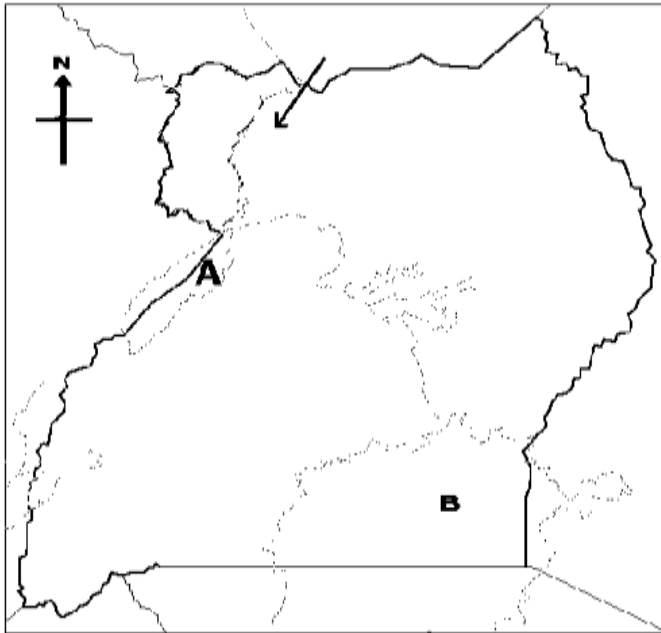
1. Which ruling dynasty was formed by the Luo in Bunyoro kingdom?

2. State the type of climate that is hot and wet.

3. Mention the only block mountain in Uganda.

4. How did the size of Buganda kingdom contribute towards its growth?

Study the map of Uganda below and answer questions 5 to 7.



5. State the compass direction of lake B from lake A.

6. Which sub group of the Nilotes came to Uganda using the direction marked \longrightarrow ?

7. Use a pencil to draw the Equator.

8. Give any one way in which the people of Uganda were politically organized before the coming of the Europeans.

9. How has Kalangala district contributed towards Uganda's agricultural development?

10. What is a hinterland?

11. State the use of a compass rose to a map reader.

12. Which church official conducts the sacrament of Baptism?

13. What happened to Prophet Mohammed while he was at Hira?

14. State any two things a Muslim does before saying a prayer.



KAMPALA PARENTS' SCHOOL 2004

PRIMARY FIVE REVISION WORK INTEGRATED SCIENCE – SET 16

Name: _____ Stream: _____

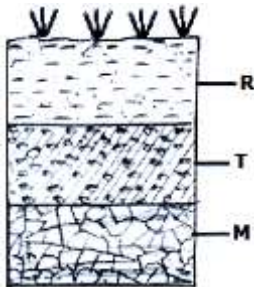
1. Name the part of cassava tuber eaten by man.

2. Besides cassava, give two other examples of root tubers.

i) _____ ii) _____

3. How does mulching help to improve the fertility of the soil?

Below is a diagram showing soil profile. Use it to answer questions about it.



4. Name layer marked T.

5. Name the layer from the diagram that is used for crop growing.

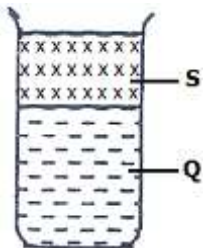
6. Identify three types of soil.

a) _____

c) _____

b) _____

The diagram below shows two liquids S and Q. Use it to answer the questions that follow.



7. Which of the two liquids S and Q is more dense than the other?

8. Give a reason to support your answer in (7) above.

9. Mention two liquids which behave like liquid S when put in water.

a) _____

c) _____

10. State the basic units of measure for the following.

a) weight _____

b) mass _____



KAMPALA PARENTS' SCHOOL 2004

PRIMARY FIVE REVISION WORK MATHEMATICS – SET 16

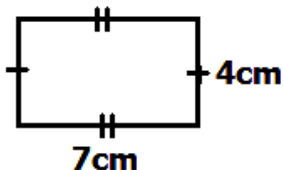
Name: _____ Stream: _____

1. Add: $7.8 + 4$

2. How many revolutions are in $\frac{2}{5}$ of a revolution?

3. Find the square root of 16.

4. Use the figure below to answer questions that follow.



a) Work out the area of the above figure.

b) How many edges does the figure have?

c) How many lines of folding symmetry has the figure above?

5. Using a ruler, a sharp pencil and a pair of compasses only, construct a regular hexagon in a circle of radius 3cm.

6. Express the following as decimal fraction.

a) $3\frac{2}{10}$

b) $\frac{3}{4}$

c) $\frac{17}{10}$

7. What is the larger angle between North and East?

-END-