



KAMPALA PARENTS' SCHOOL 2004

PRIMARY THREE REVISION WORK

LITERACY 1A

Name: _____ Stream: _____


SET SIXTEEN

1. _____ are insects which work and live together.
2. _____ is a breathing organ for insects.
3. State any **two** uses of a bird at home to a man.
 - (a) _____
 - (b) _____
4. Write any **two** birds that cannot fly.
 - (a) _____
 - (b) _____
5. State the habitat for each of the following animals.
 - (a) cow - _____
 - (b) dog - _____
 - (c) horse - _____
6. Name the part of an insect used for feeling.

7. Give any **two** products man can get from birds without killing it.
 - (a) _____
 - (b) _____
8. What is drought?

9. What is an accident?

10. Draw a bird and label the following parts:
 - (a) beak
 - (b) claw
 - (c) wattle
 - (d) tail





KAMPALA PARENTS' SCHOOL 2004

PRIMARY THREE REVISION WORK

ENGLISH

Name: _____ Stream: _____

SET SIXTEEN

Match and rewrite the following items correctly:

List A:

Spider
termite
lion
chicken
rabbit
horse

List B:

coop
hutch
web
stable
den
mound

List A:

1. _____
2. _____
3. _____
4. _____
5. _____
6. _____

List B:

- _____
- _____
- _____
- _____
- _____
- _____

Use the correct form if the verbs in in the brackets to complete the sentences:

7. I _____ a textbook to teach a story. (**use**)
8. We _____ the cake equally. (**share**)
9. She _____ the picture very well. (**shade**)
10. Mary _____ meat for supper. (**cook**)
11. God _____ the world in six days. (**create**)
12. She _____ at us yesterday. (**smile**)



KAMPALA PARENTS' SCHOOL 2004

PRIMARY THREE REVISION WORK


LITERACY 1B AND R.E


Name: _____ Stream: _____

SET SIXTEEN

1. What is fishing?

2. Draw and name any **two** fishing tools.

(a)  _____

(b)  _____

3. Give any **two** ways of preserving fish.

(a) _____

(b) _____

4. What are cardinal points?

5. Why does a pilot need a compass?

6. Write **one** way how land is useful to man.

7. Why should school children wear uniforms?

8. Match correctly:

- | | |
|-----------------|-----------------------------|
| (a) Amina | earthly father of Jesus. |
| (b) Elizabeth | father of John the Baptist. |
| (c) Virgin Mary | mother of Prophet Mohammed |
| (d) Abdallah | mother of Jesus Christ. |
| (e) Joseph | mother of John the Baptist. |
| (f) Zachariah | father of Prophet Mohammed. |



KAMPALA PARENTS' SCHOOL 2004

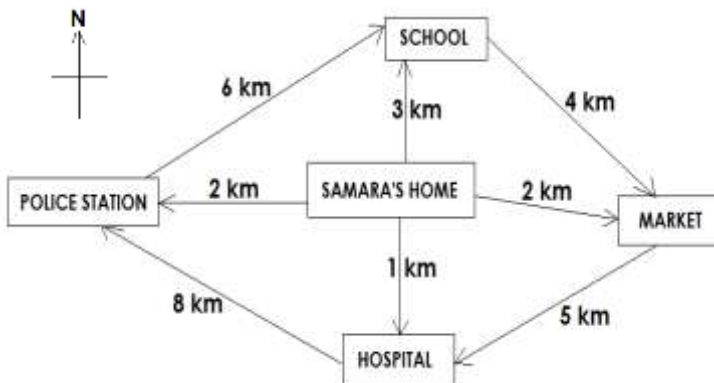
PRIMARY THREE REVISION WORK

MATHEMATICS

Name: _____ Stream: _____

SET SIXTEEN

Below is the map showing important places near Samara's house. Use it to answer questions that follow:



Questions:

1. How far is the school from Samara's home?
2. What is the direction of the school from Samara's home?
3. How far is the market from the hospital?

4. What is the direction of the hospital from Samara's home?
5. How far is the Police station via school to the market?
6. What is the direction of the market from Samara's home?
7. Name the direction of the Police station fro